

Wednesday "homework"

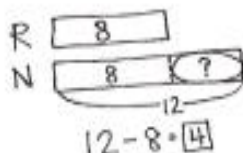
Name _____

Date _____

Read the word problem.

Draw a tape diagram or double tape diagram and label.

Write a number sentence and a statement that matches the story.



1. Peter has 3 goats living on his farm. Julio has 9 goats living on his farm.
How many more goats does Julio have than Peter?

-
2. Willie picked 16 apples in the orchard. Emi picked 10 apples in the orchard.
How many more apples did Willie pick than Emi?

3. Maria is 18 years old. Her brother Nikil is 12 years old. How much older is Maria than her brother Nikil?

-
4. It rained 15 days in the month of March. It rained 19 days in April. How many more days did it rain in April than in March?

Thursday "homework"

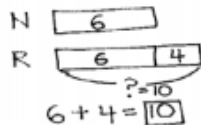
Name _____

Date _____

Read the word problem.

Draw a tape diagram or double tape diagram and label.

Write a number sentence and a statement that matches the story.



1. Kim went to 15 baseball games this summer. Julio went to 10 baseball games.
How many more games did Kim go to than Julio?

-
2. Kiana picked 14 strawberries at the farm. Tamra picked 5 fewer strawberries than Kiana. How many strawberries did Tamra pick?

4. Peter jumped into the swimming pool 6 times more than Darnel. Darnel jumped in 9 times. How many times did Peter jump into the swimming pool?


-
5. Rose found 16 seashells on the beach. Lee found 6 fewer seashells than Rose. How many seashells did Lee find on the beach?

-
6. Shanika got 12 cards in the mail. Nikil got 5 more cards than Shanika. How many cards did Nikil get?

Friday "homework"

A

Name _____

Number Correct: 

Date _____

*Write the unknown number. Pay attention to the symbols.

1.	$4 + 1 = \underline{\quad}$	16.	$4 + 3 = \underline{\quad}$
2.	$4 + 2 = \underline{\quad}$	17.	$\underline{\quad} + 4 = 7$
3.	$4 + 3 = \underline{\quad}$	18.	$7 = \underline{\quad} + 4$
4.	$6 + 1 = \underline{\quad}$	19.	$5 + 4 = \underline{\quad}$
5.	$6 + 2 = \underline{\quad}$	20.	$\underline{\quad} + 5 = 9$
6.	$6 + 3 = \underline{\quad}$	21.	$9 = \underline{\quad} + 4$
7.	$1 + 5 = \underline{\quad}$	22.	$2 + 7 = \underline{\quad}$
8.	$2 + 5 = \underline{\quad}$	23.	$\underline{\quad} + 2 = 9$
9.	$3 + 5 = \underline{\quad}$	24.	$9 = \underline{\quad} + 7$
10.	$5 + \underline{\quad} = 8$	25.	$3 + 6 = \underline{\quad}$
11.	$8 = 3 + \underline{\quad}$	26.	$\underline{\quad} + 3 = 9$
12.	$7 + 2 = \underline{\quad}$	27.	$9 = \underline{\quad} + 6$
13.	$7 + 3 = \underline{\quad}$	28.	$4 + 4 = \underline{\quad} + 2$
14.	$7 + \underline{\quad} = 10$	29.	$5 + 4 = \underline{\quad} + 3$
15.	$\underline{\quad} + 7 = 10$	30.	$\underline{\quad} + 7 = 3 + 6$