


Name \_\_\_\_\_

**Topic A: Attributes of Two Related Objects**

1a. Circle the pictures that are exactly the same?



1b. How many pictures did you circle? \_\_\_\_\_

**Topic B: Classify to make categories and count**




2a. Write the number that tells how many toys there are.

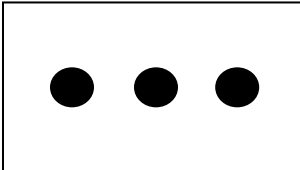
\_\_\_\_\_


2b. How many cats do you see? \_\_\_\_\_

Topic C: Numbers to 5 in Different Configurations, Math Drawings and Expressions



3. Circle the number of dots in each picture.

a.  1 2 3 4 5

b.  1 2 3 4 5

c.  1 2 3 4 5

4. How many things do you see for school? \_\_\_\_\_



**Topic D: The Concept of Zero and Numbers 0-5**

5. Write the numbers zero through five in order.

--	--	--	--	--	--