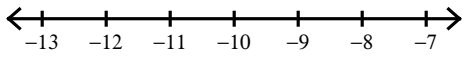


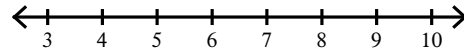
## Solving Two-Step Inequalities

Solve each inequality and graph its solution.

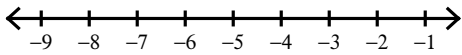
1)  $5 + \frac{p}{9} \geq 4$



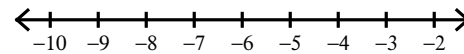
2)  $-3k - 2 < -17$



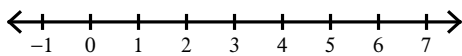
3)  $-3 + \frac{k}{3} > -5$



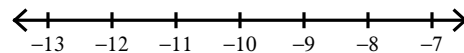
4)  $3r + 3 \geq -12$



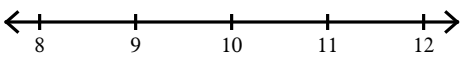
5)  $\frac{8+r}{4} \geq 3$



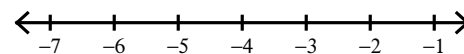
6)  $-8k + 6 \leq 94$



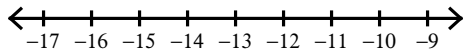
7)  $-8 + 9x \geq 82$



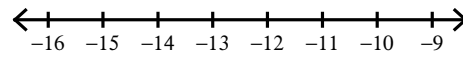
8)  $\frac{n-2}{3} > -2$



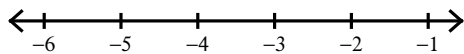
$$9) 7b + 8 \leq -83$$



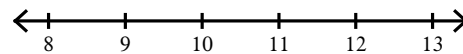
$$10) -1 < \frac{-8 + m}{22}$$



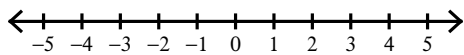
$$11) -2 \leq \frac{-6 + n}{5}$$



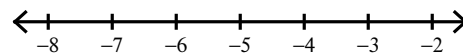
$$12) 4 < \frac{x - 2}{2}$$



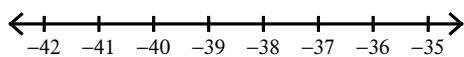
$$13) -2n + 7 \geq 7$$



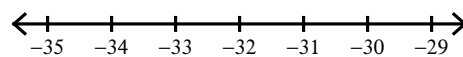
$$14) -2 \leq \frac{1 + p}{2}$$



$$15) 11 \geq 14 + \frac{p}{13}$$



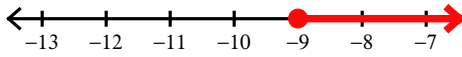
$$16) -14 + \frac{p}{8} \geq -18$$




## Solving Two-Step Inequalities

Solve each inequality and graph its solution.

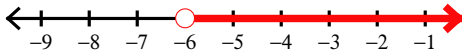
1)  $5 + \frac{p}{9} \geq 4$



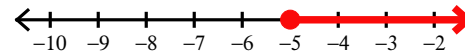
2)  $-3k - 2 < -17$



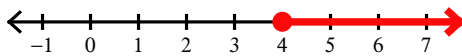
3)  $-3 + \frac{k}{3} > -5$



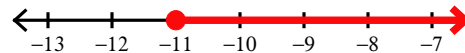
4)  $3r + 3 \geq -12$



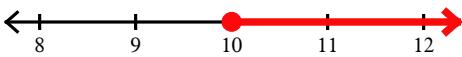
5)  $\frac{8+r}{4} \geq 3$



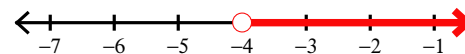
6)  $-8k + 6 \leq 94$



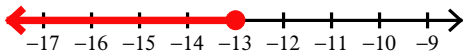
7)  $-8 + 9x \geq 82$



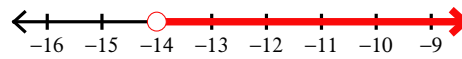
8)  $\frac{n-2}{3} > -2$




$$9) 7b + 8 \leq -83$$



$$10) -1 < \frac{-8 + m}{22}$$



$$11) -2 \leq \frac{-6 + n}{5}$$



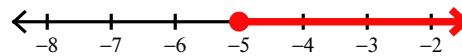
$$12) 4 < \frac{x - 2}{2}$$



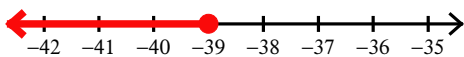
$$13) -2n + 7 \geq 7$$



$$14) -2 \leq \frac{1 + p}{2}$$



$$15) 11 \geq 14 + \frac{p}{13}$$



$$16) -14 + \frac{p}{8} \geq -18$$

