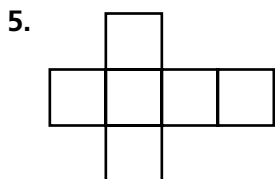
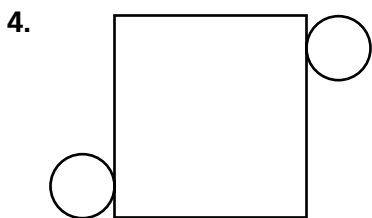
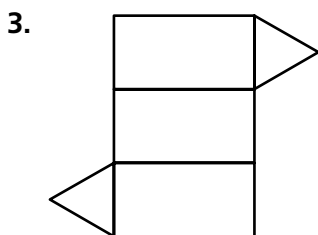
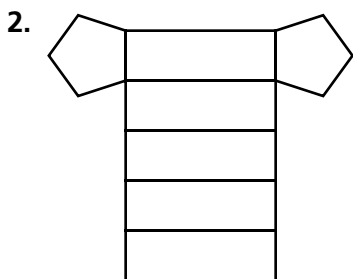
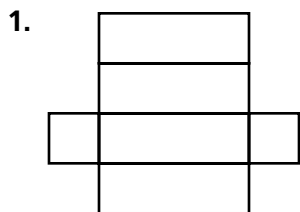


Skill: Nets and Surface Area

Investigation 3

Filling and Wrapping

Name the three-dimensional shape you can form from each net.



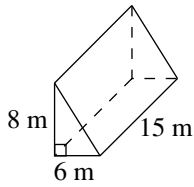
Skill: Nets and Surface Area *(continued)*

Investigation 3

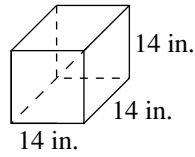
Filling and Wrapping

Find the surface area of each figure to the nearest square unit.

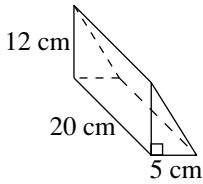
6.



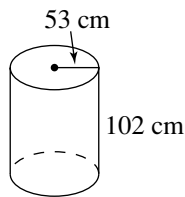
7.



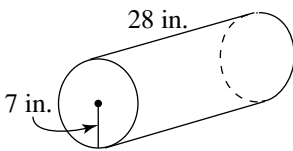
8.



9.



10.



11.

