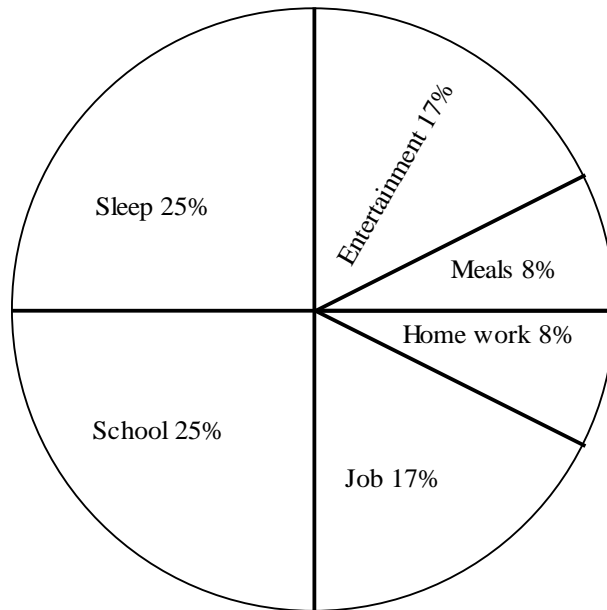


Circle and Bar Graphs

Name _____ Period _____ Date _____

1. Following is a graphical representation of activities done by people of a particular town



- a. These two activities took up half of the time of the day

Entertainment and School
Meals and School
Sleep and School

- b. These two activities took up least of the time

Sleep and School
Meals and Homework
Sleep and job

- c. Which of these took one fourth of the day

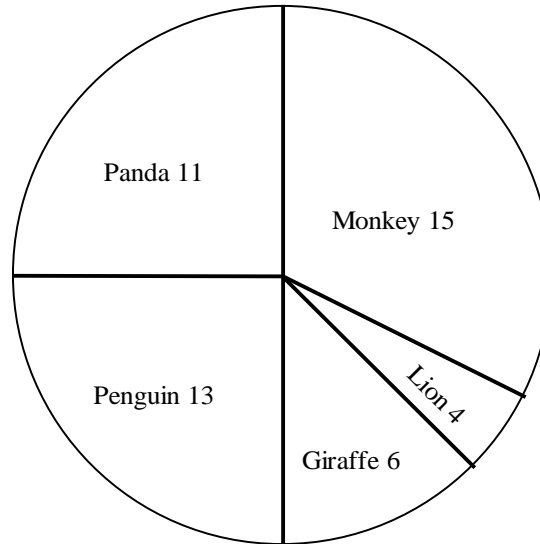
Entertainment
Sleep
Homework

d. What percent of day does homework take up

- 2
- 8
- 25

e. Which of these takes up the same amount of time as meals and entertainment together

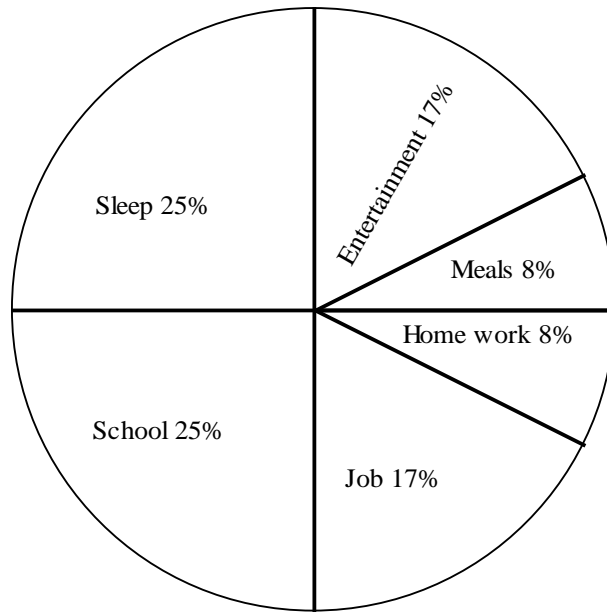
2. Students were asked their favorite animals at zoo, the pie chart presents the data



- a. How many students voted?
- b. Which is the most popular animal at zoo?
- c. What percentage of students voted for the Lion?
- d. What percentage voted for Panda?
- e. Which animal received the lowest number of votes?

Name ANSWER KEY Period _____ Date _____

Following is a graphical representation of activities done by people of a particular town



f. These two activities took up half of the time of the day

- Entertainment and School
- Meals and School
- Sleep and School

g. These two activities took up least of the time

- Sleep and School
- Meals and Homework
- Sleep and job

h. Which of these took one fourth of the day

- Entertainment
- Sleep
- Homework

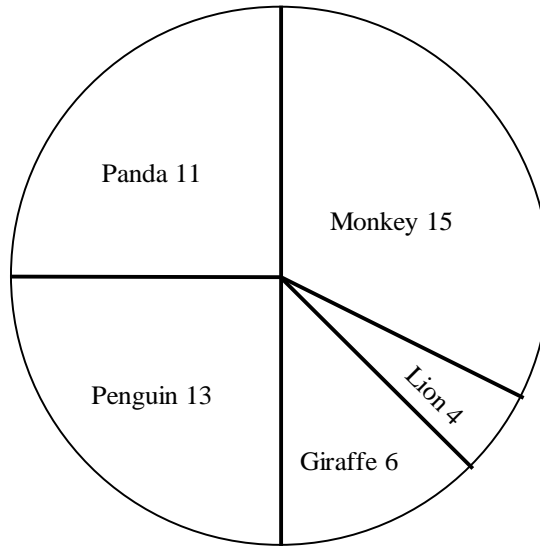
i. What percent of day does homework take up

- 2
- 8
- 25

j. Which takes up the same amount of time as meals and entertainment together

Sleep
School

2. Students were asked their favorite animals at zoo, the pie chart presents the data



- a. How many students voted? 49
- b. Which is the most popular animal at zoo? Monkey
- c. What percentage of students voted for the Lion? 8
- d. What percentage voted for Panda? 22
- e. Which animal received the lowest number of votes? Lion