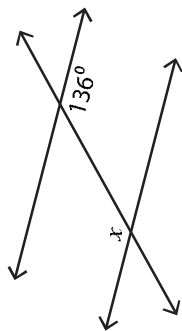


### Angles in Transversal

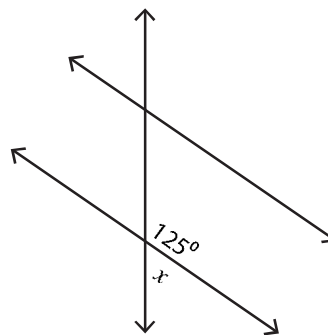
Find the value of  $x$ .

1)



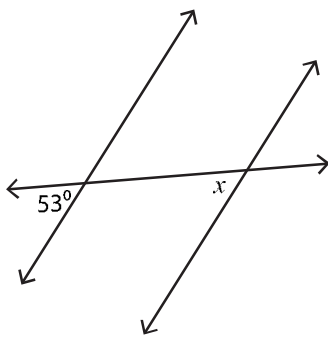
$x =$  \_\_\_\_\_

2)



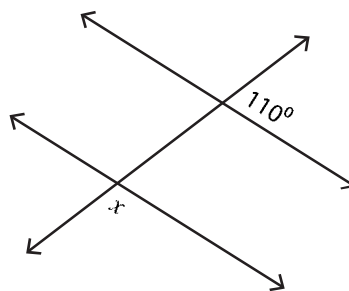
$x =$  \_\_\_\_\_

3)



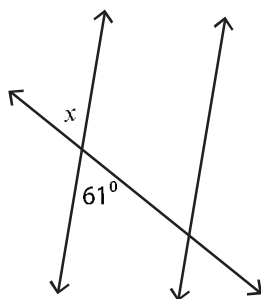
$x =$  \_\_\_\_\_

4)



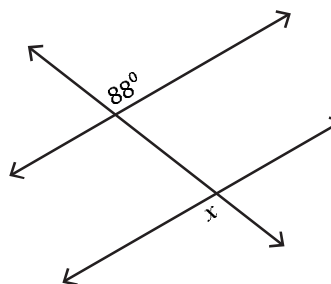
$x =$  \_\_\_\_\_

5)



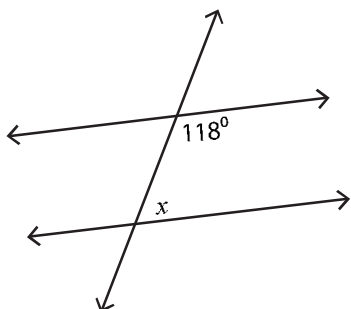
$x =$  \_\_\_\_\_

6)



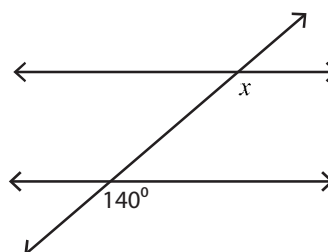
$x =$  \_\_\_\_\_

7)



$x =$  \_\_\_\_\_

8)



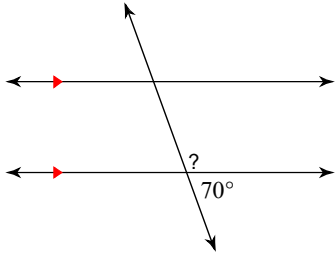
$x =$  \_\_\_\_\_

## Angles

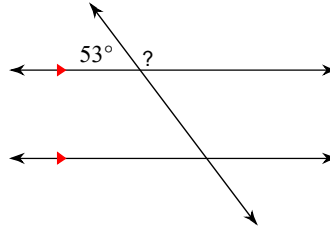
© 2011 Kuta Software LLC. All rights reserved.

Find the measure of each angle indicated.

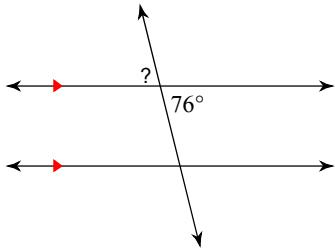
1)



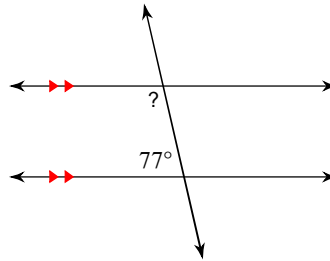
2)



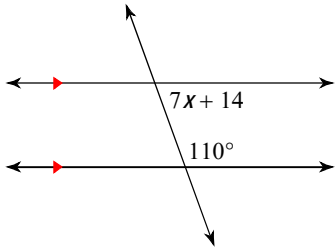
3)



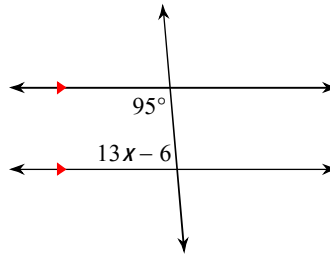
4)

Solve for  $x$ .

5)

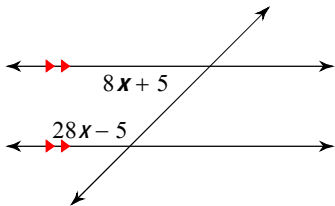


6)



Find the measure of the angle indicated in bold.

7)



8)

